

Class 4<sup>th</sup>

06.08.2021

CCA Topic: Math puzzles

Solve the puzzles

Based on NCERT pattern

Q1.


The image shows a 5x5 grid with mathematical symbols and numbers. The grid is as follows:

- Row 1: [Blank] + [Blank] = 8
- Row 2: + [Blank] + [Blank]
- Row 3: [Blank] - [Blank] = 6
- Row 4: = [Blank] = [Blank]
- Row 5: 13 [Blank] 8 [Blank]

Q2.

$$\begin{aligned} \text{burger} + \text{drink} + \text{fries} &= 58 \\ 1 \times \text{burger} &= \text{fries} \\ \text{drink} \times \text{drink} &= 64 \end{aligned}$$




$$\text{burger} = ? \quad \text{drink} = ? \quad \text{fries} = ?$$



Q3.

$$\begin{aligned} \text{cookie} + \text{cake} \times \text{ice cream} &= 70 \\ 10 - \text{cake} &= \text{cake} \\ \text{cookie} \div \text{cake} &= 8 \end{aligned}$$



$$\text{cake} = ? \quad \text{cookie} = ? \quad \text{ice cream} = ?$$

Q4.

 $+$  $-$  $= 7$

 $-$  $= 1$

 $= 7 - 3 + 1$

 $+$  $= 9$

 $= ?$

Subject tr Rohit kumar

